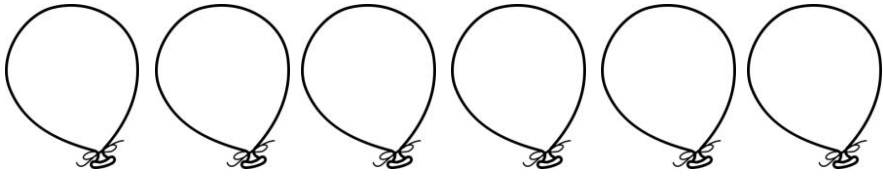
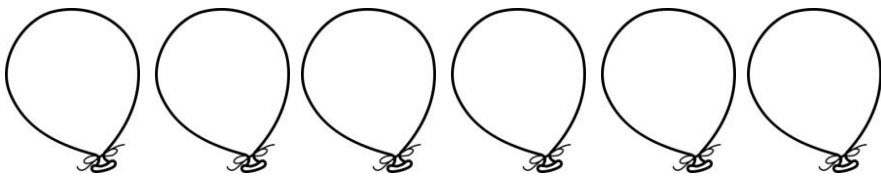


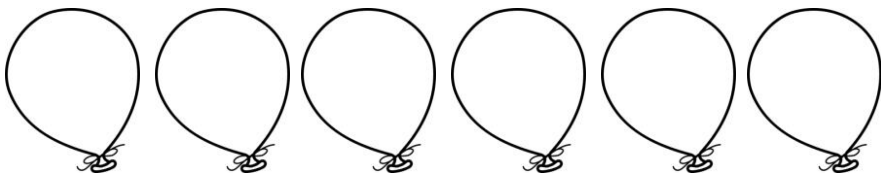
Slå en tärning. Måla så många ballonger som tärningen visar. Skriv 6-kamraterna på mattespråk.



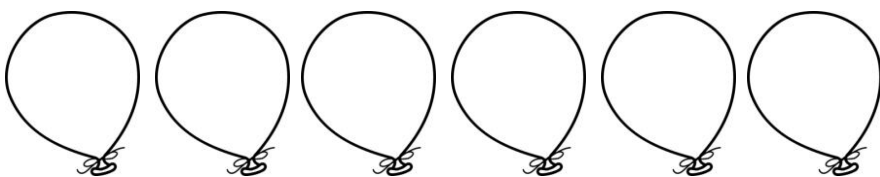
$$\underline{\quad} + \underline{\quad} = 6$$



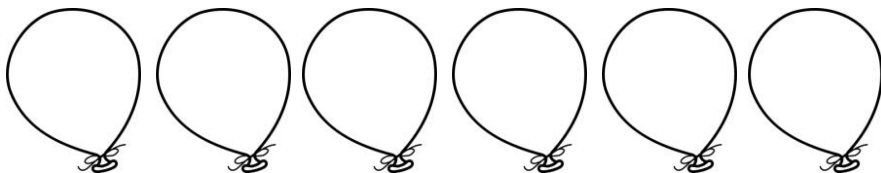
$$\underline{\quad} + \underline{\quad} = 6$$



$$\underline{\quad} + \underline{\quad} = 6$$



$$\underline{\quad} + \underline{\quad} = 6$$



$$\underline{\quad} + \underline{\quad} = 6$$

